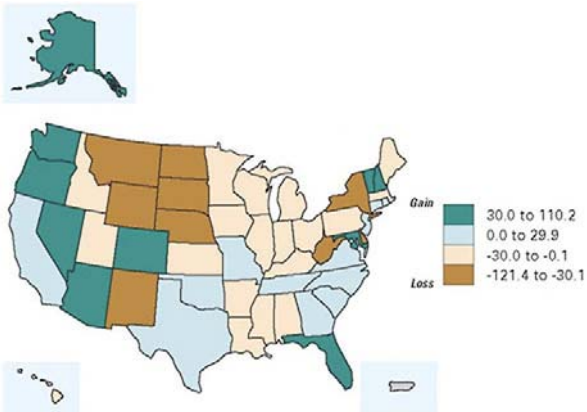


California or Bust



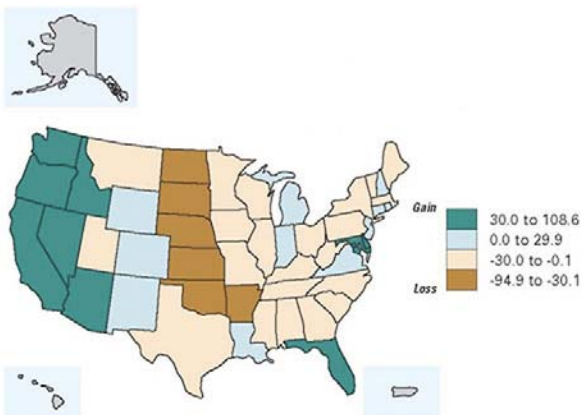
Federal Census figures demonstrate the migration of people from state to state and from region to region over the years. Below are three maps depicting the migration rate (the rate of net domestic migration per 1,000 people), each covering a five-year period. Match each map to the period it represents.

1.



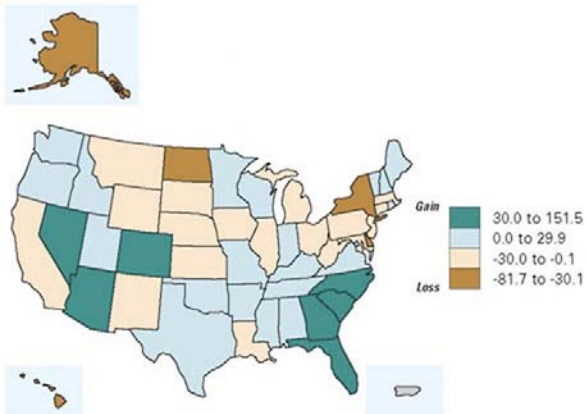
- 1935-1940
- 1965-1970
- 1995-2000

2.



- 1935-1940
- 1965-1970
- 1995-2000

3.



- 1935-1940
- 1965-1970
- 1995-2000

Sources:

Hobbs, Frank Hobbs and Nicole Stoops. U.S. Census Bureau. Census 2000 Special Reports, Series CENSR-4. *Demographic Trends in the 20th Century: Census 2000 Special Reports*. Washington, DC: U.S. Government Printing Office, 2002, <http://www.census.gov/prod/2002pubs/censr-4.pdf>

Suchan, Trudy A. et al., *Census Atlas of the United States*. Washington, DC: U.S. Census Bureau, 2007.

<http://teachinghistory.org/history-content/quiz>